

Class 6 Sample Question:

English:

Q1 You don't need much food to feed those.

(Choose the pronoun in each statement and choose under which variety does it all into.)

- (A) reflexive, demonstrative
- (B) personal, reflexive
- (C) possessive, personal
- (D) personal , Demonstrative

Q2. On the other hand, where can you get a _____ tasty ice cream cone?
(Choose the correct adverbs in the following sentence.)

- (A) frequently
- (B) really
- (C) tastily
- (D) yesterday

Q3. Tomorrow after school, I (go) _____ to the beach. (Simple Present/ Simple Future/ Present Continuous/ Future Continuous)

- (A) will go (B) will be going (C) am going to go (D) am going

Q4. What does 'it slipped my mind' mean?

- (A) Forgot to do something
- (B) Just remember to do something
- (C) Something went past my head
- (D) Cannot understand anything

Q5. Select the correct meaning of the underlined word from the options given.

It's raining cats and dogs today. We will have to cancel our field trip.

- (A) It's raining heavily
- (B) It's sunny
- (C) It's very warm
- (D) It's windy

Mathematics and Aptitude:

Q6. What is the smallest common multiple of 4, 6 and 5?

- (A) 30
- (B) 60
- (C) 24
- (D) 36

Q7. What is the measure of each angle of an equilateral triangle?

- (a) 55°
- (b) 70°
- (c) 60°
- (d) 90°

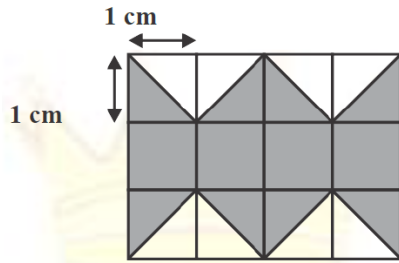
Q8. The given table shows the temperature of a city for 7 consecutive hours.

Hour	1	2	3	4	5	6	7
Temperature ($^\circ\text{C}$)	-6	15	-2	23	12	0	-4

Calculate the difference between the highest and the lowest temperature of the city over the 7 hour period.


- (A) 17°C
- (B) 29°C
- (C) 21°C
- (D) 25°C

Q9. What is the area of the shaded figure ?



- (A) 4 cm²
- (B) 6 cm²
- (C) 8 cm²
- (D) 10 cm²

Q10. Two rectangular plots of length 40 m and width 20 m are as shown.



What is the cost of fencing the plots at Rs. 4 per metre ?

- (A) 16000
- (B) 1600
- (C) 640
- (D) 6400

Science:

Q11 Given below are names of some animals/organisms:

Goat ; Human beings ; Cockroach ; Eagle

Which of the above animals form a pair of omnivores?

- (A) (iii) and (iv)
- (B) (ii) and (iv)
- (C) (i) and (ii)
- (D) (ii) and (iii)

Q12 _____ is not a milk product.

- (A) Ice-cream
- (B) Curd
- (C) Cheese
- (D) Soy

Q13 What is added to milk to set curd?

- (A) Bacteria
- (B) Fungi
- (C) Virus
- (D) Lemon

Q14 In an electric bulb, light is produced due to the glowing of


- (A) the glass case of the bulb
- (B) the thick wires supporting the filament
- (C) the thin filament
- (D) gases inside glass case of the bulb

Q15 Which of the following is not a good conductor of electricity?

- (A) Plastic
- (B) Silver
- (C) Copper
- (D) Graphite

GENERAL KNOWLEDGE

Q16. The animals given below are similar as they all are



- (A) herbivores
- (B) carnivores
- (C) insectivores
- (D) omnivores.

Q17. Who was the first Prime Minister of independent India who hoisted the Indian flag on 15 August 1947?

- (A) Dr Rajendra Prasad
- (B) Sardar Vallabhbhai Patel
- (C) Jawaharlal Nehru
- (D) Mahatma Gandhi

Q18. To which tribe did Birsa belong to?

- (A) Mundas
- (B) Kols
- (C) Oreons
- (D) Santhals

Q19. What does the acronym WHO stand for ?

- (a) World Human Organization
- (b) World Health Organization
- (c) World's Health Objective
- (d) Women Health Organization

Q20. Which Country is not a neighbor of India ?

- a) Pakistan
- b) Nepal
- c) Bangladesh
- d) Russia

Computer

Q21 _____ is the most popular social networking site.

- A) Google
- B) Yahoo
- C) Facebook
- D) Microsoft

Q22 In India, Internet services started on _____

- a) 15th Aug 1995
- b) 15th Aug 1985
- c) 15th Aug 2005
- d) 15th Aug 2015

Q23 _____ is a USA based popular E-commerce company.

- (A) Amazon.com
- (B) flipkart.com
- (C) Bing.com
- (D) Google.com

Q24 Using _____ option in Accessories, we can perform simple and complex arithmetic calculations.

- (A) Calculator
- (B) MS Excel
- (C) Powerpoint
- (D) Notepad

Answers:

1.D 2.B 3.A 4.A 5.A 6.B 7.C 8.B 9.C 10.C 11.D 12.D 13.A
14.C 15.A 16.A 17.C 18.A 19.B 20.D 21.C 22.A 23.A 24.A